

## SECTION 1

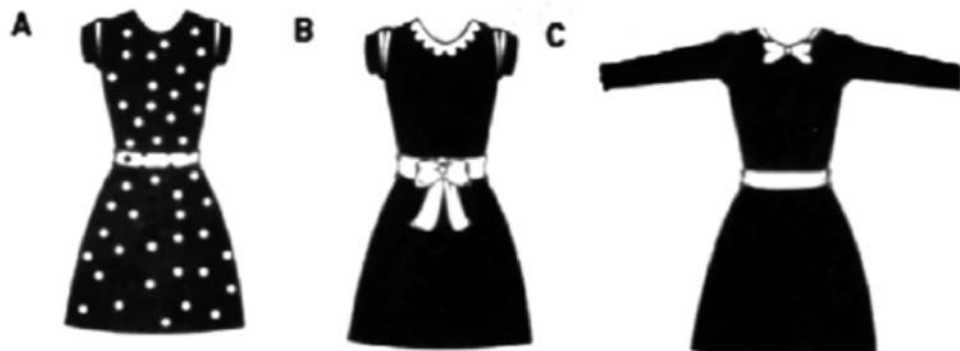
### QUESTIONS 1-3

Answer the questions below. Choose the correct letter, **A**, **B** or **C**

1 Why does Ellen want some new clothes?

- A** for her holiday
- B** for her new job
- C** for her brother's wedding

2 Which dress does Ellen want to buy?



3 Which hat does Ellen decide to buy?



## QUESTIONS 4-7

Complete the form below. Write **NO MORE THAN THREE WORDS AND/OR A NUMBER** for each answer.

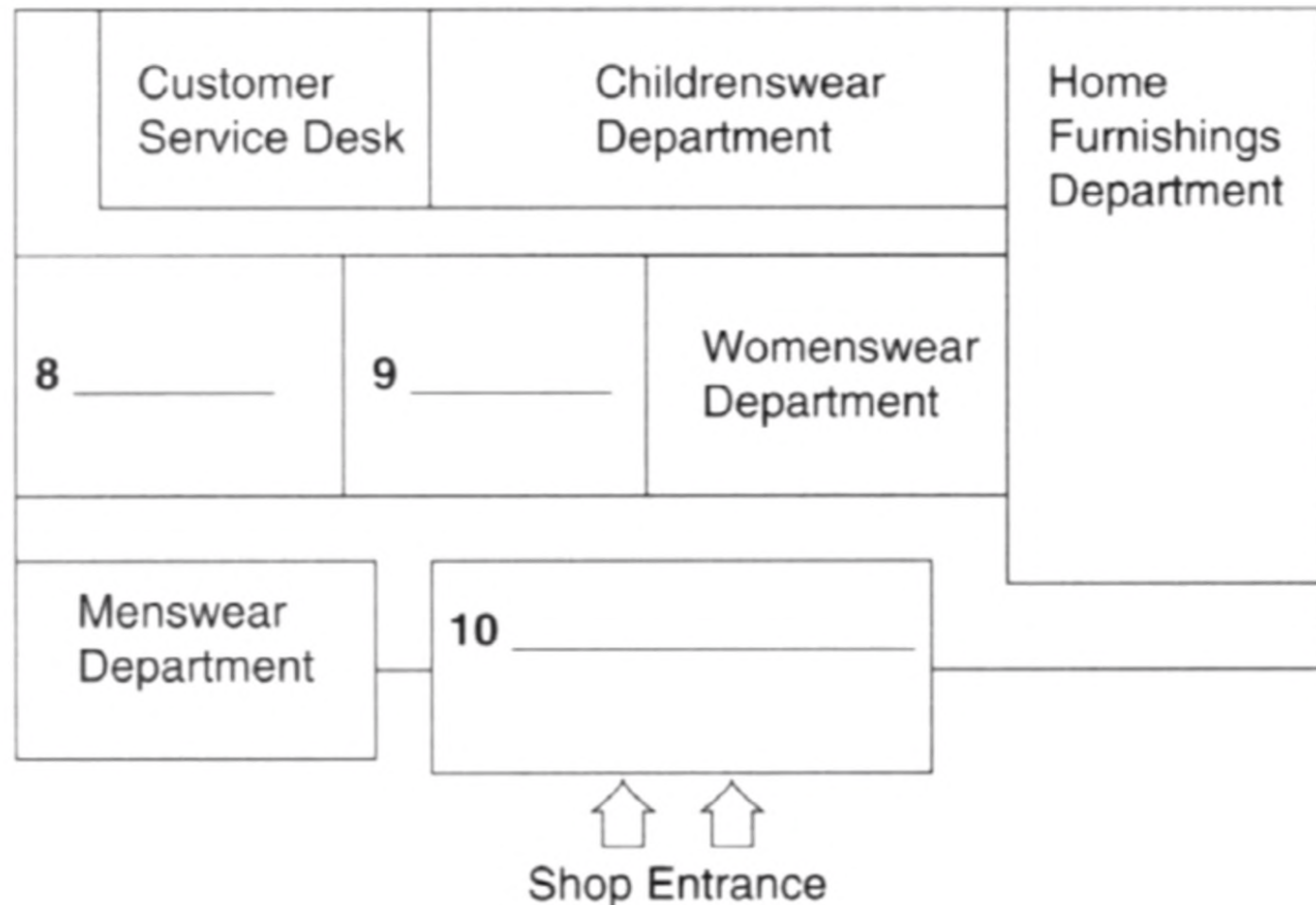
### Delivery Form

Name: Ellen Barker  
Delivery address: **4** \_\_\_\_\_  
Staybridge  
Kent  
DA4 7DF  
Telephone Number: **5** \_\_\_\_\_  
Delivery date: 12<sup>th</sup> May  
Delivery time: **6** \_\_\_\_\_  
Payment type: Visa  
Amount: **7** £ \_\_\_\_\_

## Questions 8 To 10

Complete the plan below. Write **NO MORE THAN THREE WORDS AND/OR A NUMBER** for each answer.

### Department store layout:



Section - 1 Questions 11 - 20

Circle the correct letter A - C .

11. Mary Golding is .....

- A. College lecture
- B. the student officer
- C. a tour guide

12. The trip begins on .....

- A. Wednesday 4th April
- B. Saturday 31st March
- C. Wednesday 31st March

13. They Will travel by .....

- A. a minibus with 16 places
- B. a medium-sized coach with 45 seats
- C. a medium-sized bus with 54 seats

Questions 14-18

Will you have to pay for these activities ?

Write **F** if is free .

**I** if it is included in the cost of the trip

**P** if you have to pay for it yourself

14. A boat ride .....

15. Ride the london Eye .....

16. Big Ban .....

17. Westminster Abbey .....

18. British Museum .....

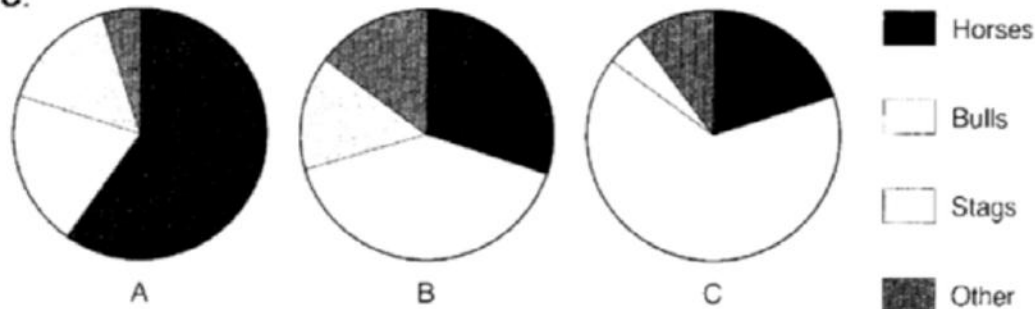
Questions 19 - 20

Fill the table with NO MORE THREE WORDS for each answer.

Spots	Main Attractions
British Museum	Newly constructed £ 100 million (19) _____
Natural History Museum	(20) _____ million specimens, including _____ gallery

**Question 21**  
Choose the correct letter **A**, **B** or **C**.

21 Which graph shows the distribution of animals painted on the caves?



**Questions 22–25**

How does the woman describe each type of drawing?

Choose your answers from the box and write the letters **A–H** next to questions 22–25.

22 bulls .....

23 humans .....

24 signs .....

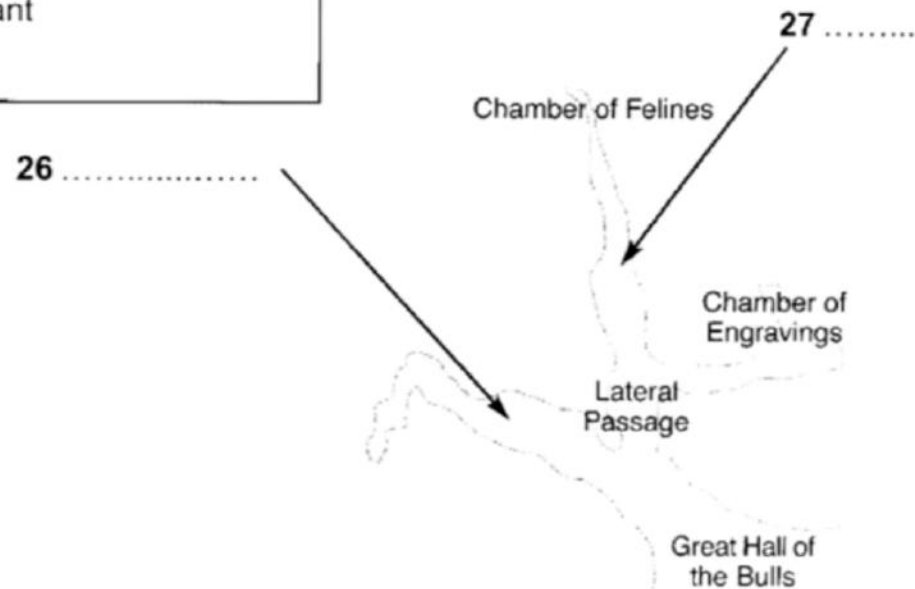
25 fish .....

- |                          |                             |
|--------------------------|-----------------------------|
| <b>A</b> uncommon        | <b>E</b> consisting of dots |
| <b>B</b> realistic       | <b>F</b> complex            |
| <b>C</b> two-dimensional | <b>G</b> important          |
| <b>D</b> childish        | <b>H</b> huge               |

**Questions 26–27**

Label the diagram below.

Write **NO MORE THAN THREE WORDS** for each answer.



## Questions 28–30

Choose the correct letter **A**, **B** or **C**.

- 28** The cave was closed in 1963 because
- A** the tourists had drawn pictures on the walls.
  - B** the air was harming the rock art.
  - C** so few people were visiting the site.
- 29** How does David feel about the closure of the cave?
- A** He agrees with the decision.
  - B** He thinks it was a bad idea.
  - C** He has no views on the matter.
- 30** How can people enjoy the drawings today?
- A** The government has re-opened the cave.
  - B** The drawings have been photographed.
  - C** A replica of the cave has been built.

**Questions 31 - 32**

Answer the questions by writing **NO MORE THAN THREE WORDS**.

31. What have vertebrate in common?

32. Name two groups of the cold-blooded vertebrate?

**Questions 33 - 36**

Circle the correct letter (s).

33. What is the body of a toad made up?

- A. The head, the trunk and the tail.
- B. Two pairs of legs, skins and the toes.
- C. The head and the trunk.
- D. The head, neck and tail.

34. Where do toads produce poison?

- A. From their mouths.
- B. From their skins.
- C. From their legs.
- D. From their toes.

36. Tick the birds which have wings, but can't fly.

- A. Parrots
- B. Penguins
- C. Emus
- D. Flamingoes

**Questions 37 - 40**

Complete the notes below by using **NO MORE THAN THREE WORDS** for each answer.

Name	Shape of the Bill	Function
Ducks	37.	For sieving small bits of food from mud
38.	Sharp, pointed	For 39. _____ small animals and tearing fishes
Storks, flamingoes	40.	For searching for frogs and worms